

WEDDING GUESTS

You need to seat 441 wedding guests for lunch in a hall.

You have various tables to choose from which seat different numbers of people.

You need to fill as many tables as possible because you haven't got much space in the hall to put them in.

- Estimate which kind of table you think will be the best one to use.
- Work out which table will actually be the best one.
- Explain why you think it is the best one.

Explain your answers as well as you can.

TABLE A.

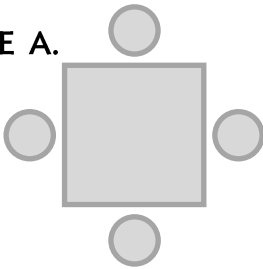


TABLE B.

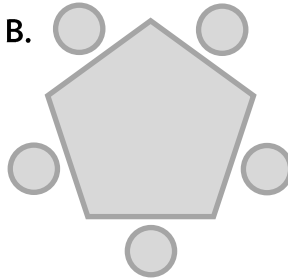


TABLE C.

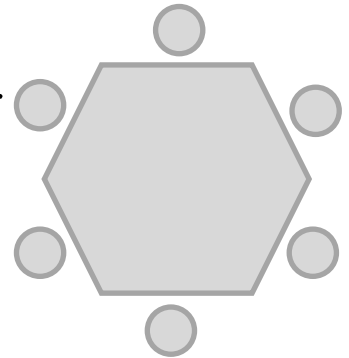


TABLE D.

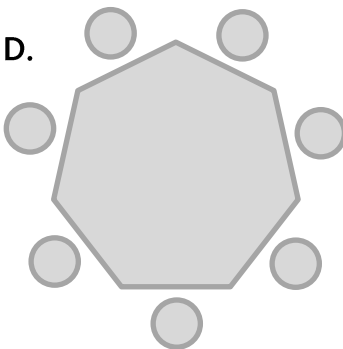


TABLE E.

