

## 12.1.21 LO to recognise notes

- 1 Draw a line to match the note to its value.  
Look closely at the numbers on the note!



5 pounds

20 pounds

10 pounds

50 pounds

- 2 Dan has two £10 notes and one £5 note.  
Circle the notes that Dan has.



- 3 Here are some notes.



Complete the sentences.

There are  £5 notes.

There are  £10 notes.

There are  £20 notes.

There are  £50 notes.

4 Tick the note with the smaller value.

a)



b)




c)




5 Write  $<$ ,  $>$  or  $=$  to compare the amounts.

a)




50 pounds

b) 20 pounds




c)



10 pounds

6 Kim has some money.



I have a 30 pound note.

Do you agree with Kim? \_\_\_\_\_

Talk about your answer.