


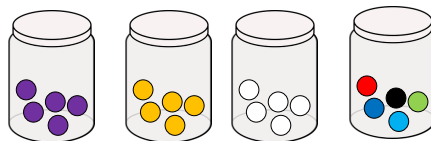
Which group of money is the odd one out? Explain your answer.



1. masterthecurriculum.co.uk

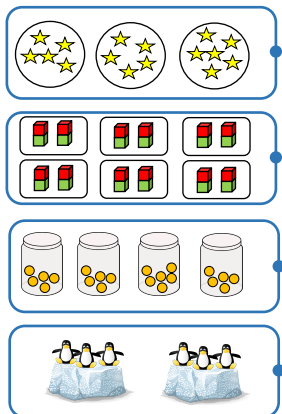
Is the statement true or false?
Explain your answer.

The groups are unequal because the counters are different colours.



2. masterthecurriculum.co.uk

Draw a line to show equal or unequal groups.



Equal groups

Unequal groups

3. masterthecurriculum.co.uk

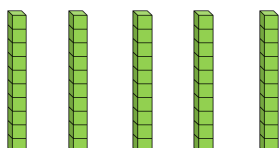
Draw your own pictures to go in each column.

Equal groups	Unequal groups

4. masterthecurriculum.co.uk

Spot and explain the mistake.

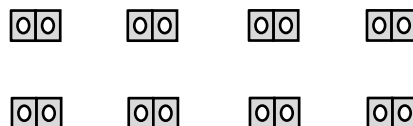
There are ten equal groups with 5 in each group.



5. masterthecurriculum.co.uk

Spot and explain the mistake.

There are seven equal groups with 2 in each group.



6. masterthecurriculum.co.uk